


Kindergarten Worksheet: Non-Standard Measurement

Name: _____

Date: _____

◆ Let's Measure With Blocks


Count the blocks to measure each object.




The pencil is _____ blocks long.



The crayon is _____ blocks long.



The chair is _____ blocks tall.



The desk is _____ blocks tall.