

Grade 1-2 Worksheet: Early Ruler Practice

Name: _____


Date: _____

◆ Section 1: Measuring with a ruler

Use a ruler to measure each object in centimeters (cm).



Measurement = _____ cm.



Measurement = _____ cm.




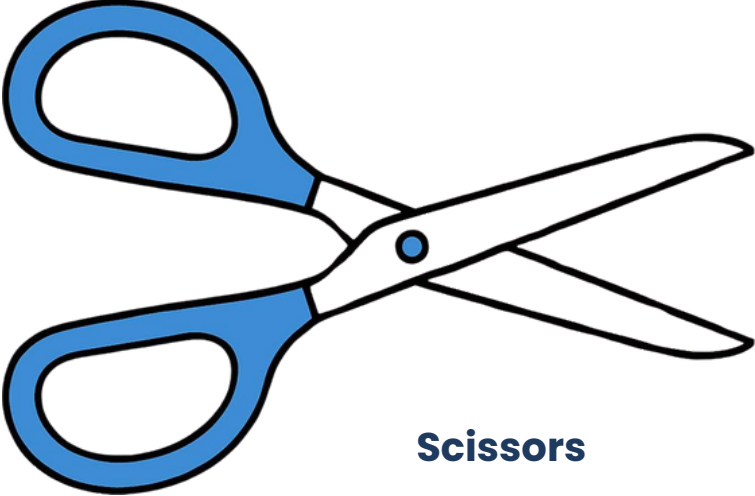

Measurement = _____ cm.



Measurement = _____ cm.

◆ Section 2: Estimation

Before measuring, guess the length.

Object	My Guess	Actual Length
 <p>ERASER</p>	_____ cm	_____ cm
 <p>Scissors</p>	_____ cm	_____ cm
 <p>GLUE STICK</p>	_____ cm	_____ cm

◆ Challenge:

Which object is the longest? _____