

Grade 4 Worksheet - Triangles

Name: _____

Date: _____

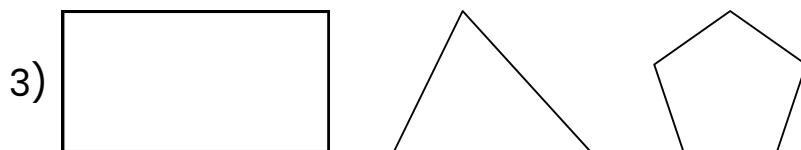


◆ Section 1: What is a Triangle?

Fill in the blanks

A triangle is a shape with _____ sides and _____ vertices (corners).

◆ Section 2: Identify Triangles

Tick (✓) the shapes that are triangles.



◆ Section 3: Parts of a Triangle

Complete the statements.

- 1) A triangle has _____ sides.
- 2) A triangle has _____ vertices (corners).
- 3) A triangle has _____ angles.

◆ Section 4: Types of Triangles (by Sides)

Match each triangle to its correct name.

Word bank: **Scalene** **Equilateral** **Isosceles**

Description

Name

- | | |
|----------------------------|-------|
| 1) All sides are equal | _____ |
| 2) Two sides are equal | _____ |
| 3) All sides are different | _____ |

◆ Section 5: Types of Triangles (by Angles)

Write the correct name.

Word bank: **Obtuse** **Acute** **Right**

- 1) A triangle with one square vertex (corner) _____
- 2) A triangle with all angles less than a square vertex _____
- 3) A triangle with one angle bigger than a square corner _____

