

Grade 2 Worksheet - 2D Shapes

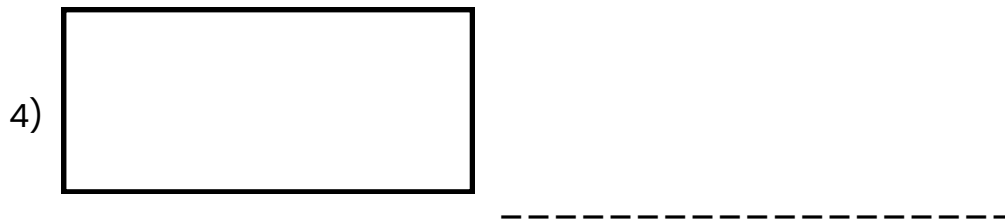

Name: _____

Date: _____

◆ Section 1: Name the shape

circle square triangle rectangle

Use the words above to write the correct name

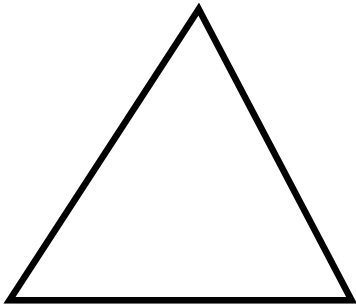


◆ Section 2: Match the Shape


Draw a line to match

Shapes

1)



2)



3)



4)



Names

Square

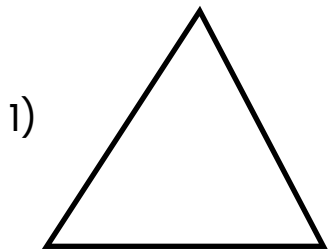
Rectangle

Circle

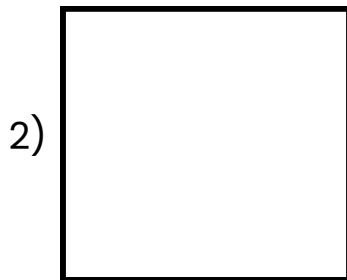
Triangle

◆ Section 3: Count the Sides

Look at each shape and write the number of sides.



Triangle → _____ sides



Square → _____ sides



Rectangle → _____ sides

◆ Section 4: Draw the shape

Draw each shape in the box.

1) Circle →	
2) Square →	
3) Triangle →	
4) Rectangle →	